

Kaç tane araba var ?  
Sayalım ve işaretleyelim.



Kaç tane otobüs var ?  
Sayalım ve işaretleyelim.



1

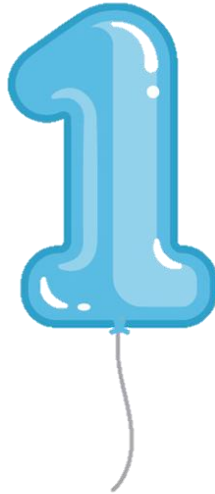

3

2





5

4

Kaç tane uçak var ?  
Sayalım ve işaretleyelim.



Kaç tane tren var ?  
Sayalım ve işaretleyelim.



Kaç tane bisiklet var ?  
Sayalım ve işaretleyelim.

